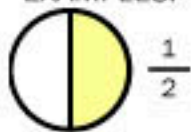




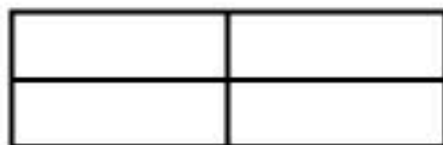

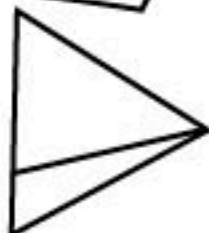
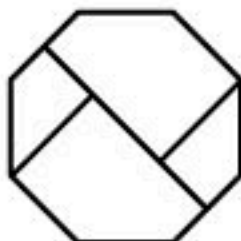
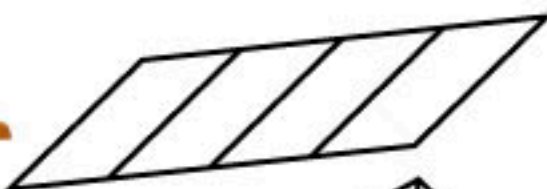

Fun with fractions!

EXAMPLES:



Look at the shapes below. Find the ones that are divided into equal sized parts. If a shape is divided into 2, colour one of the parts. This is called $\frac{1}{2}$

Do the same thing with the shapes that are divided into 4 equal parts. See the example at the side. Count how many of each there are and write the answers in the space below.



Fantastic!

$\frac{1}{2} =$ _____

$\frac{1}{4} =$ _____



There are shapes that are $\frac{1}{4}$

There are shapes that are $\frac{1}{2}$

ANSWERS:

See you tomorrow for a new activity!