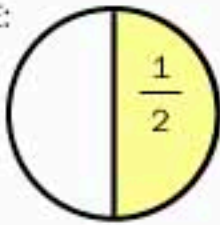



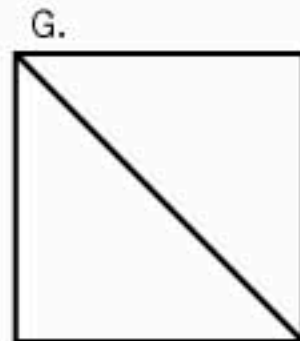
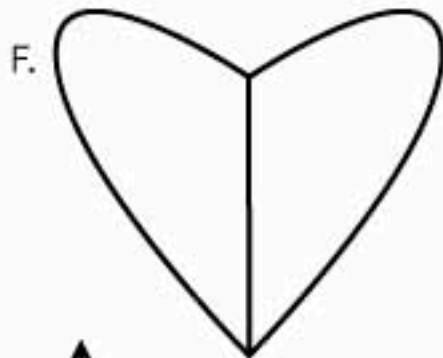
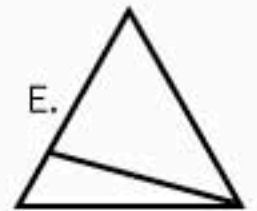

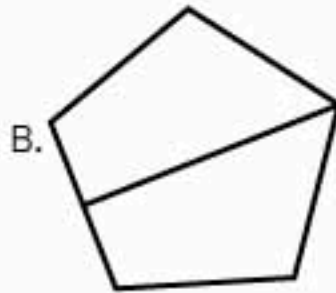


EXAMPLE:



## Fun with fractions!

Circle the shapes that have been divided into 2 equal parts. Colour 1 of these parts. This is 1 of 2 equal parts or,  $\frac{1}{2}$  **Nice work!**



See you tomorrow for a new activity!

MATH\_FRACTIONS\_HALF\_024

ANSWERS: A-NOPE B-NOPE C-RIGHT D-RIGHT E-NOPE F-RIGHT G-RIGHT H-RIGHT I-NOPE J-NOPE