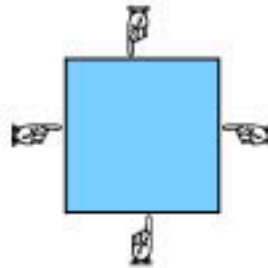


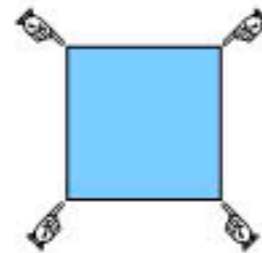


# Fun with shapes 1

Count the number of sides on each of the shapes below and write the answer on the line. Do the same thing with the number of corners. One of these shapes has only 1 side, can you find it?



4 sides



4 corners

## RECTANGLE



\_\_\_\_\_ sides

\_\_\_\_\_ corners

## SQUARE



\_\_\_\_\_ sides

\_\_\_\_\_ corners


## TRIANGLE



\_\_\_\_\_ sides

\_\_\_\_\_ corners

## OVAL



\_\_\_\_\_ sides

\_\_\_\_\_ corners

Answer: the OVAL

See you tomorrow for a new activity!

ANSWERS: RECTANGLE= 4 sides, 4 corners, SQUARE= 4 sides, 4 corners, TRIANGLE= 3 sides, 3 corners, OVAL= 1 side, 0 corners